

Name: _____

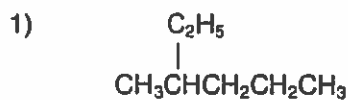
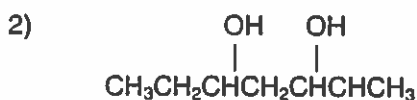
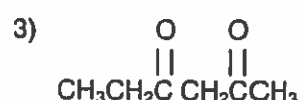
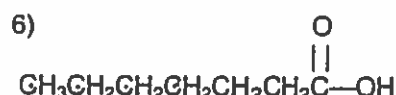
ANSWERS

Date: _____

SBI 4UI

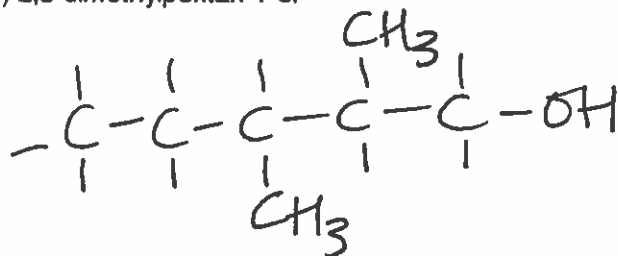
More Organic Nomenclature Practice

Name the following molecules:

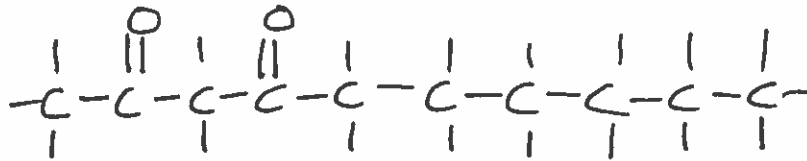
2,4-dimethylhexaneheptan-2,3,5-triolhexane-2,4-dionebutadiene
butan-1,2-dienepropanamineheptanoic acid

Draw the following molecules:

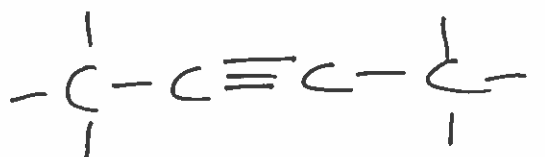
7) 2,3-dimethylpentan-1-ol



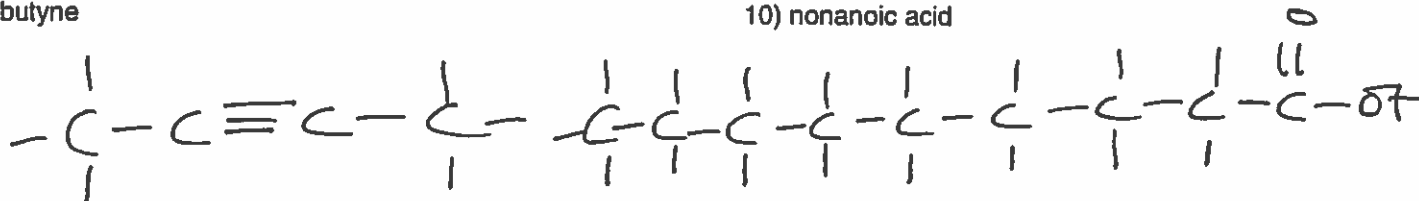
8) decane-2,4-dione



9) 2-butyne



10) nonanoic acid



Circle and identify any functional groups present:

